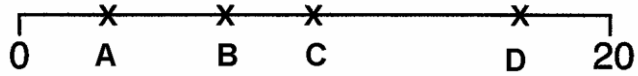


Examples of items in the GLIM test from the different languages are shown below;

Axis Language

Estimate where you think 17 should go on this number line.



Answer

A

B

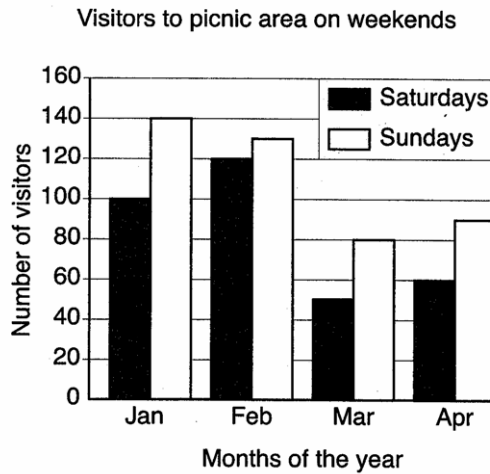
C

D

QSCC (2000). *2000 Queensland Year 3 test: Aspects of Numeracy*, p. 11. VIC: ACER.

Opposed-position Language

This graph shows the number of visitors to the picnic area for Saturdays and Sundays.



Which month had the most visitors on Sundays?

Answer

January

February


March

April

QSCC (2000). *2000 Queensland Year 7 test: Aspects of Numeracy*, p. 9. VIC: ACER.

Retinal-List Language

When the last piece is put into this puzzle it shows 3 triangles.



(A)



(B)



(C)



(D)

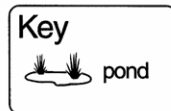
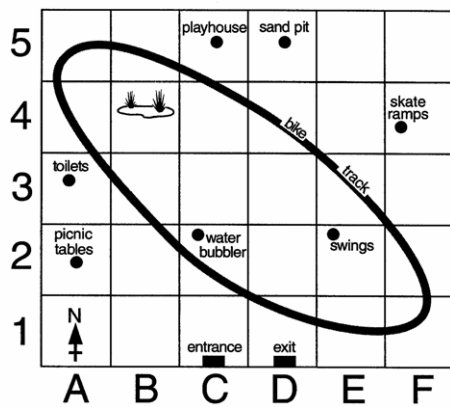
Which piece is missing from this puzzle?

Answer	
<input type="checkbox"/>	A
<input type="checkbox"/>	B
<input type="checkbox"/>	C
<input type="checkbox"/>	D

Educational Assessment Australia (2002). *Australian Schools Mathematics Competition Year 4, p. 8.* Sydney: University of New South Wales.

Map Language

Picnic Park

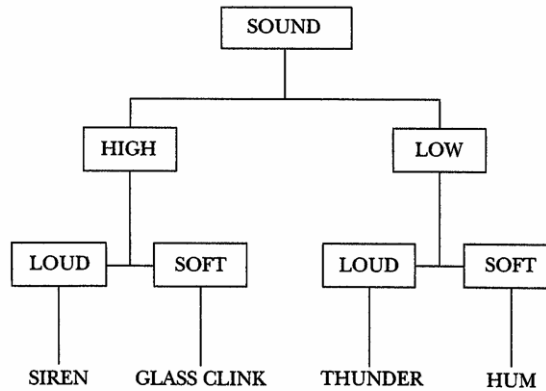


Answer	
<input type="checkbox"/>	A5
<input type="checkbox"/>	B5
<input type="checkbox"/>	A4
<input type="checkbox"/>	B4

Deb rides her bike along the bike track.
What part of the Park won't she ride through?

Connection Language

This flowchart shows a way to describe sounds.



Which of the following describes a 'hum'?

Answer

- high and loud
- high and soft
- low and loud
- low and soft

Educational Testing Centre (2001). *Australian Schools Science Competition Year 6, p. 3.* Sydney: University of New South Wales.

Miscellaneous Language

Which date is 3 weeks before 29 May?

MAY 2003

Sun	Mon	Tue	Wed	Thu	Fri	Sat
				1	2	3
4	5	6	7	8	9	10
11	12	13	14	15	16	17
18	19	20	21	22	23	24
25	26	27	28	29	30	31

Answer

- 3 May
- 8 May
- 15 May
- 26 May

QSCC (2000). *2000 Queensland Year 3 test: Aspects of Numeracy, pp. 9, 1 (of insert).* VIC: ACER

Further information

For further information on the GLIM test, please contact;

Queensland University of Technology - l.sugars@qut.edu.au

Charles Sturt University, Wagga Wagga - tlogan@csu.edu.au